




Divide 2-Digits by 1-Digit 1

4. True or false? All of the representations below show $60 \div 3 = 20$.

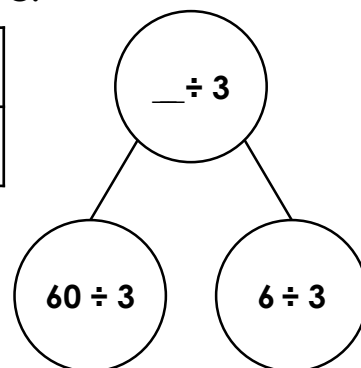
A.

Tens	Ones
	
	
	

B.

60		
20	20	20



C.



VF
HW/Ext

5. Complete the images below and match to a division calculation.

A.

Tens	Ones
	



$$36 \div 3 = 12$$

$$44 \div 4 = 11$$

$$68 \div 2 = 34$$

$$39 \div 3 = 13$$


B.



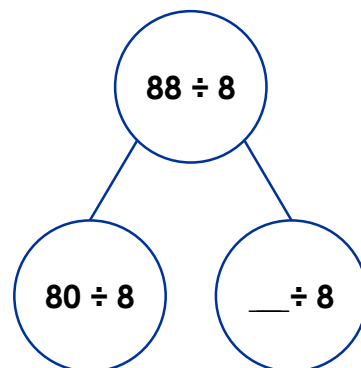
VF
HW/Ext

6. Lydia says,



88 can be divided into 8 equal groups of 10.

Do you agree with her? Explain your reasoning.



RPS
HW/Ext